

# Cambridge O Level

---

**GEOGRAPHY**

**2217/02**

Paper 2 Human Geography

**For examination from 2027**

SPECIMEN INSERT

**1 hour 45 minutes**

---

**INFORMATION**

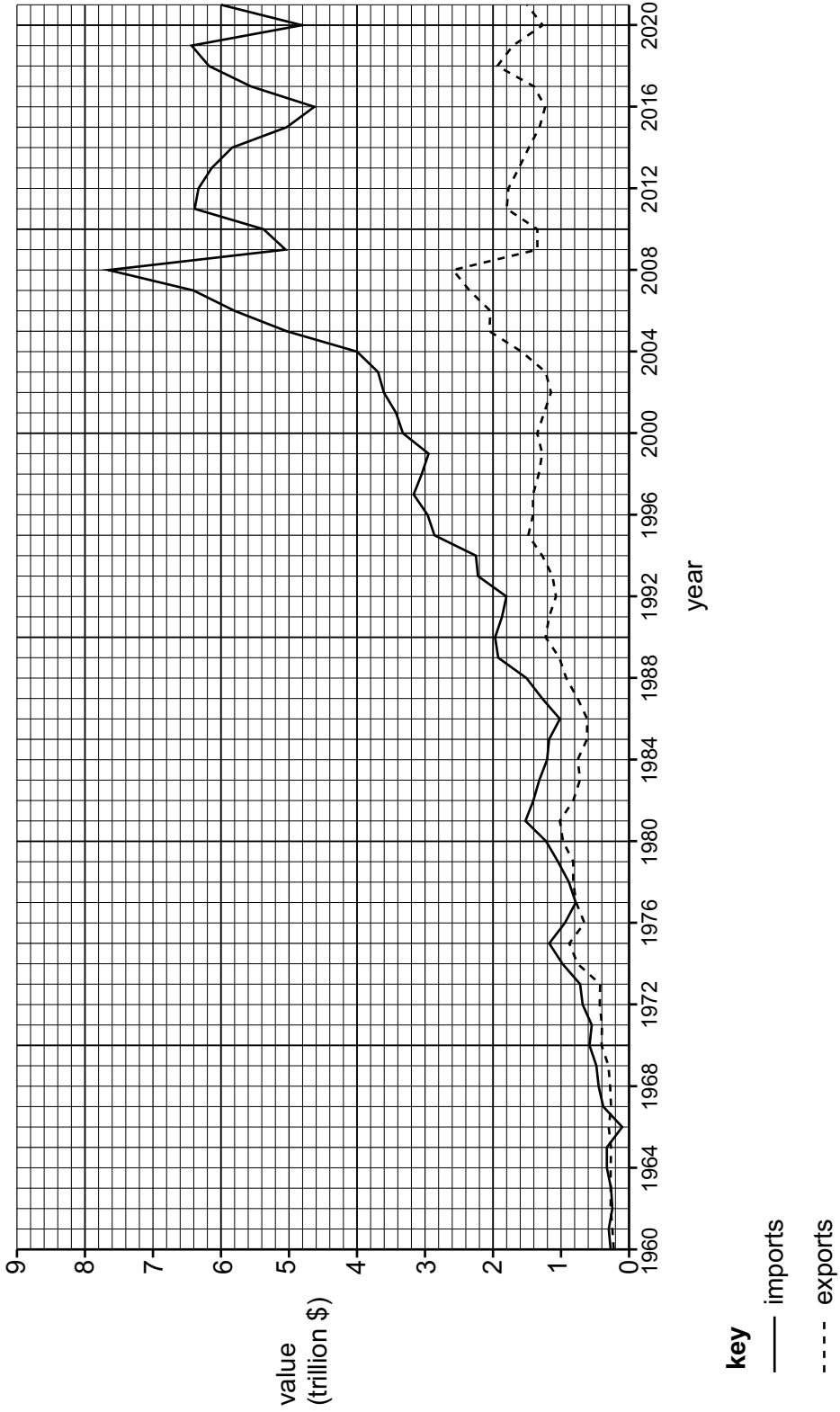
- This insert contains all the resources referred to in the questions.
- You may annotate this insert and use the blank spaces for planning. **Do not write your answers** on the insert.



---

This document has **6** pages. Any blank pages are indicated.

Figure 1.1 for Question 1  
The value of imports and exports of Jamaica between 1960 and 2021



**Figure 1.2 for Question 1**

**Photograph showing location A at Newport West**



**Figure 1.3 for Question 1**

**Photograph showing location B at Bridgeport**



Figure 2.1 for Question 2  
Average annual rate of population change (%) 2015–2020

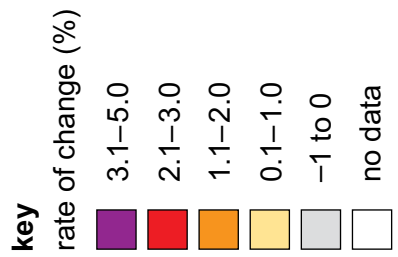
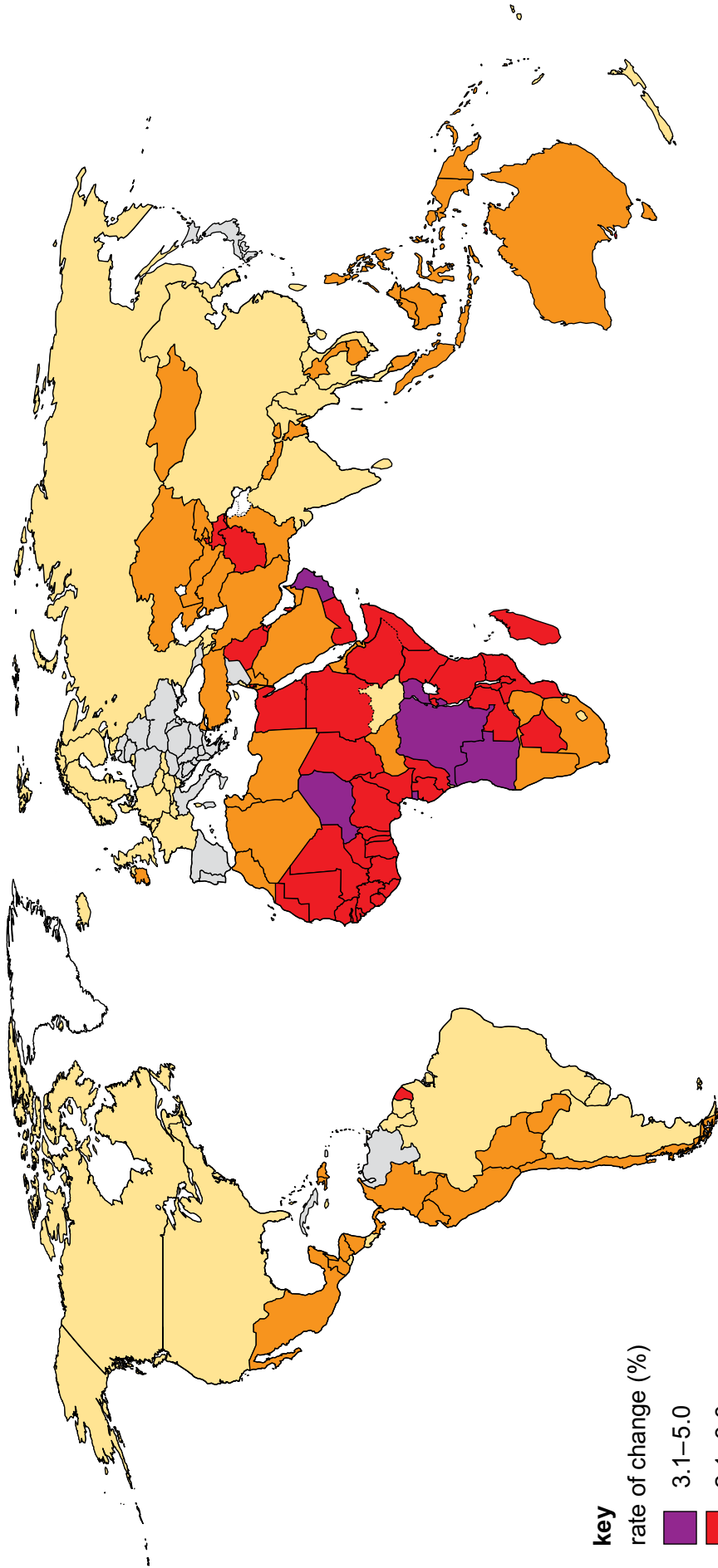


Figure 4.2 for Question 4

Photograph showing part of an urban area in Europe.



Figure 4.3 for Question 4

Photograph showing part of an urban area in Europe.



## BLANK PAGE

---

**Copyright acknowledgements**

- Question 1, Figure 1.1 © Exports plotted against imports for the period 1960–2021; Aubyn Hill; Jamaica Observer; 30 April 2023; [www.jamaicaobserver.com/2023/04/30/jamaica-must-export-a-lot-more/](http://www.jamaicaobserver.com/2023/04/30/jamaica-must-export-a-lot-more/)
- Question 1, Figure 1.2 © Ref: 2CCJ7Y2; Lucia Gajdosikova / Alamy Stock Photo; *View on Kingston Harbour in Jamaica is the seventh-largest natural harbour in the world. In the background are gantry cranes and red ship*; [www.alamy.com](http://www.alamy.com)
- Question 1, Figure 1.3 © Ref: 458197465; Peeter Viisimaa; *Kingston, Jamaica – stock photo*; [www.getty.co.uk](http://www.getty.co.uk)
- Question 2, Figure 2.2 © Birth rate and death rate in China 1950–2014; Phoenix7777; Creative Commons Attribution-Share Alike 4.0 International license; <https://creativecommons.org/licenses/by-sa/4.0/deed.en>
- Question 4, Figure 4.2 Steve Sibley © Cambridge University Press & Assessment
- Question 4, Figure 4.3 © Ref: BP7BEM; adsheyn / Alamy Stock Photo; *Modern suburban homes in Poland*; [www.alamy.com](http://www.alamy.com)

The boundaries and names shown, the designations used and the presentation of material on any maps contained in this question paper/insert do not imply official endorsement or acceptance by Cambridge International Education concerning the legal status of any country, territory, or area or any of its authorities, or of the delimitation of its frontiers or boundaries.

Permission to reproduce items where third-party owned material protected by copyright is included has been sought and cleared where possible. Every reasonable effort has been made by the publisher (Cambridge University Press & Assessment) to trace copyright holders, but if any items requiring clearance have unwittingly been included, the publisher will be pleased to make amends at the earliest possible opportunity.

Cambridge International Education is the name of our awarding body and a part of Cambridge University Press & Assessment, which is a department of the University of Cambridge.